



Nome: _____

Data: _____



LE CARTE D'IDENTITÀ DI ALCUNE FIGURE PIANE




Il quadrato ha ...

..... lati della stessa lunghezza;

..... angoli della stessa ampiezza;

..... vertici.




Il rettangolo ha ...

..... lati uguali a 2 a 2;

..... angoli della stessa ampiezza;

..... vertici.



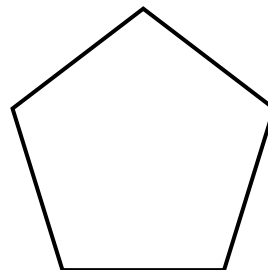
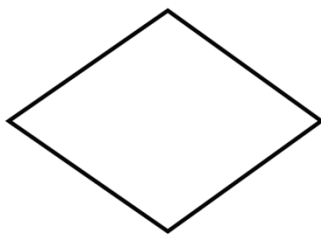

Il triangolo ha ...

..... lati;

..... angoli;

..... vertici.

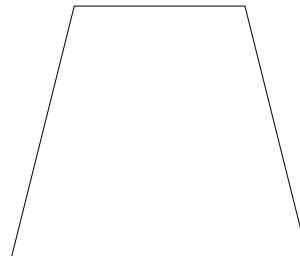
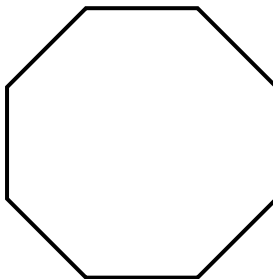
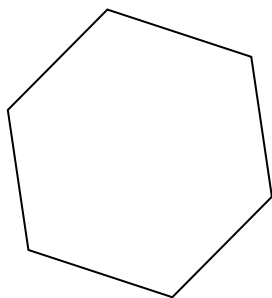
Esistono anche altre figure piane, proviamo a scrivere i nomi di alcune di loro.



.....

.....

.....



.....

.....

.....

